

1. MEASURES TEST

1. 30cm = mm 560cm = metres
 4.5m = cm 3500m = km


2. If **5 miles = 8km** then change

- (a) 30miles = km (b) 72km = miles

3. To make **12 doughnuts** you need 180g of butter.
 How much butter is needed for **18 doughnuts**?

.....

4. (a) Here is a rectangle of length 8cm and width 3cm.



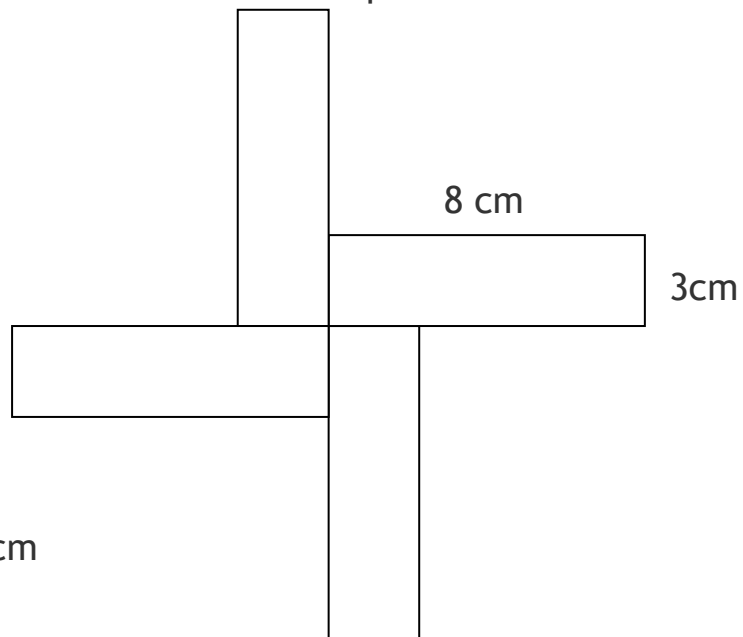
Work out

8 cm

The perimeter = cm

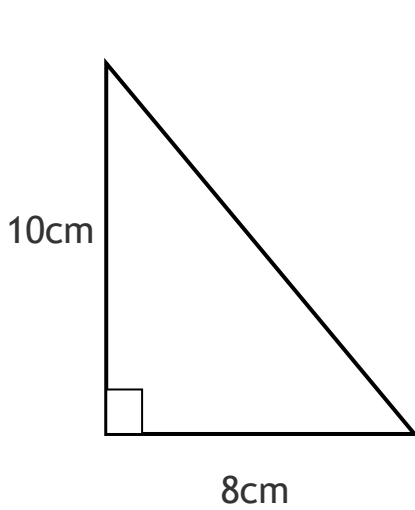
The area =cm²

(b) Four of these rectangles are used to make a pattern. Find the perimeter of the pattern.

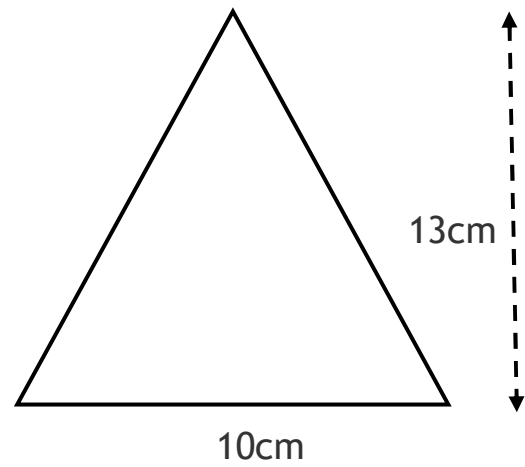


PERIMETER = cm

5. Find the area of the following triangles

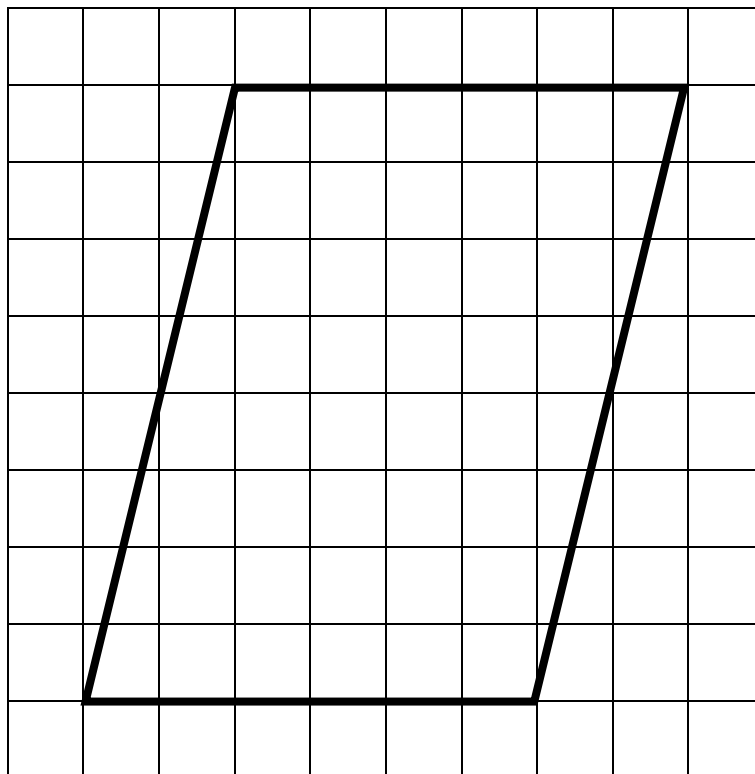


Area = cm^2



Area = cm^2

6. Find by any method, the area of this parallelogram



Area = cm^2