

Number

Write the following numbers in words. Remember to use commas where needed.

1. 4 856

2. 32 507

4. Write the following using digits (e.g. 8 435)

(a) Five thousand, three hundred and twelve.

(b) Forty two thousand and nine.

5. Alex has three cards, each with a number on it:



(a) What is the **biggest** number he can make that is **smaller** than 600?

Three empty rounded rectangular boxes are arranged horizontally for writing the answer.

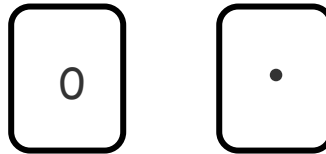
(b) What is the **smallest number** he can make that is **odd**?

Three empty rounded rectangular boxes are arranged horizontally for writing the answer.

(c) Work out the **difference** between your two numbers.

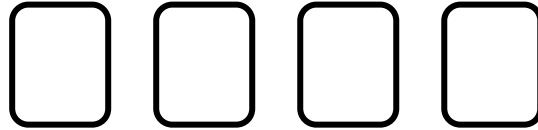
.....

(d) Alex has 2 more cards

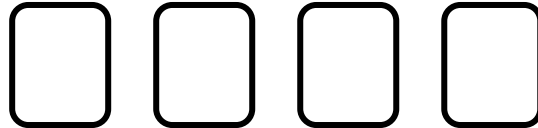


Use **one** of these new cards to make :

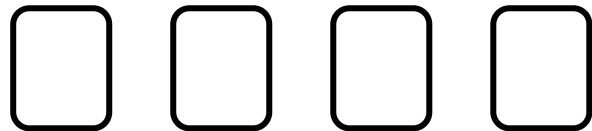
365 **ten** times bigger



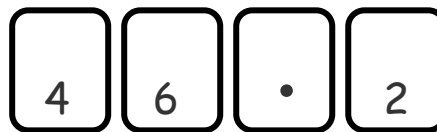
365 **ten** times smaller



365 **one hundred** times smaller



6. Emma's number is



She makes it **10 times bigger** by adding a



She gets



Explain why she is wrong. Write down the number she should get.

.....

.....