

Name: .....

Revision Homework Sheet 1

1a. Find  $\frac{1}{4}$  of £6.00

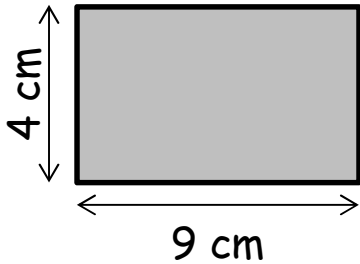
.....

1b. Find  $\frac{3}{4}$  of £6.00

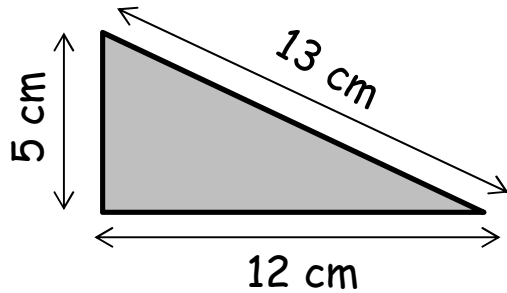
.....

2. Calculate the **Area** of the shapes below. Show method and units.

a.



b.



.....

.....

.....

3. Calculate the **Perimeter** of the shapes. Show method and units.

a. ....

b. ....

4a. Find 50% of 72cm

.....

4b. Find 10% of 72cm

.....

5. Use arithmetic to calculate  $27 \times 34$ . Show your working.

Name: .....

Revision Homework Sheet 1

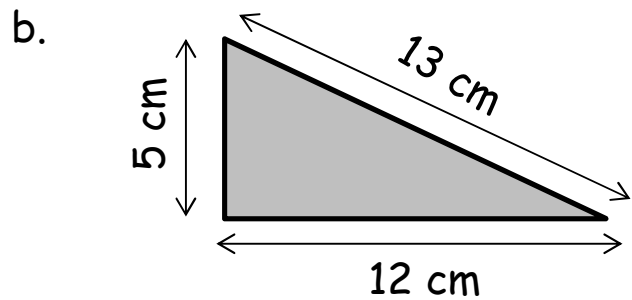
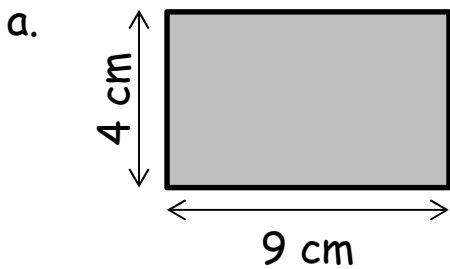
1a. Find  $\frac{1}{4}$  of £6.00

.....

1b. Find  $\frac{3}{4}$  of £6.00

.....

2. Calculate the **Area** of the shapes below. Show method and units.



.....  
.....  
.....

3. Calculate the **Perimeter** of the shapes. Show method and units.

a. ....

b. ....

4a. Find 50% of 72cm

.....

4b. Find 10% of 72cm

.....

5. Use arithmetic to calculate  $27 \times 34$ . Show your working.